



Porovnávej množství. O kolik je teček méně, více?




3


>




2




5



3




4




4




1




3




5




4




3




3




4




2




2




1




3




3




4




3




1



5




2




2


Porovnávej množství. O kolik je teček méně, více?





6 < 9





8 10





7 6



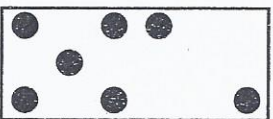
5 8





10 7





6 8




9 7





4 9





7 5





3 8



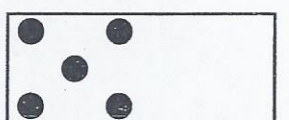

10 6




9 8




7 8



10 5



4 9



9 6

Porovnávej čísla.

$1 \square < 3$

$4 \square 3$

$2 \square 2$

$5 \square 3$

$5 \square 5$

$1 \square 4$

$4 \square 2$

$2 \square 1$

$4 \square 5$

$3 \square 3$

$3 \square 4$

$5 \square 2$

$8 \square 6$

$6 \square 9$

$9 \square 7$

$10 \square 10$

$8 \square 7$

$6 \square 6$

$9 \square 7$

$10 \square 8$

$10 \square 9$

$6 \square 8$

$9 \square 9$

$9 \square 8$

$2 \square 10$

$5 \square 10$

$3 \square 6$

$10 \square 1$

$7 \square 7$

$1 \square 9$

$0 \square 10$

$9 \square 3$

$3 \square 3$

$3 \square 6$

$4 \square 8$

$7 \square 2$

Doplň čísla od 0 do 10 tak, aby platilo:

$2 < \square \square \square \square \square \square \square \square$

$4 > \square \square \square$

$8 > \square \square \square \square \square \square \square \square$

$5 = \square$

$7 > \square \square \square \square \square \square \square$

$5 < \square \square \square \square \square$

$9 = \square$

$10 > \square \square \square \square \square \square \square \square$

$6 > \square \square \square \square \square \square$

$7 = \square$

$1 < \square \square \square \square \square \square \square \square$

$8 = \square$

$5 > \square \square \square \square \square$